


Nombre _____


1 Cuenta, completa y escribe cómo se lee cada número.



$$40 + 6 = 46$$


46 ►

cuarenta y seis




$$\square + \square = \square$$

\square ►



$$\square + \square = \square$$

\square ►

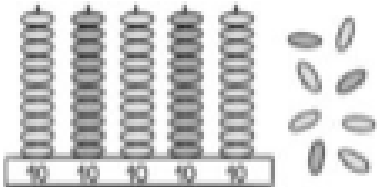


$$\square + \square = \square$$

\square ►


Nombre _____

1 Cuenta y completa.


▶

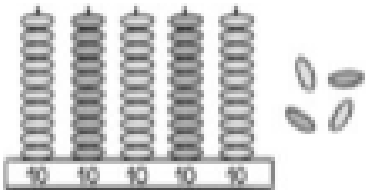
D	U
5	8

▶
 $50 + 8 = 58$


▶

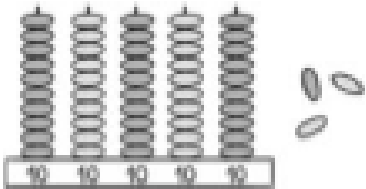
D	U

▶
 $\square + \square = \square$


▶


D	U

▶
 $\square + \square = \square$


▶

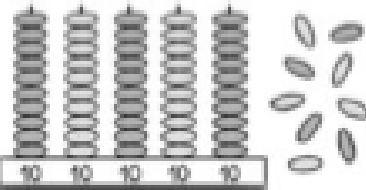
D	U

▶
 $\square + \square = \square$


▶

D	U

▶
 $\square + \square = \square$


▶

D	U

▶
 $\square + \square = \square$